




PASSEXAM 問題集

更に上のクオリティ 更に上のサービス



1年で無料進級することに提供する
<http://www.passexam.jp>

Exam : **300-120**

Title : Implementing Cisco
Wireless Advanced
Solutions

Version : DEMO

1.How many retries may a station attempt before a Cisco AP dumps the frame?

- A. 128
- B. 64
- C. 32
- D. 16

Answer: B

2.What is illustrated by the following figure?



- A. Cisco PI Health
- B. DNA Center Global Network Health
- C. DNA Center Users Health
- D. Cisco PI default dashboard

Answer: B

3.In wireless LAN networks, what is the companion mechanism to CSMA/CD in wired networks?

- A. Carrier Sense Media Access/Collision Avoidance
- B. Carrier Sense Multiple Access/Collision Avoidance
- C. Code Sense Multiple Access/Collision Avoidance
- D. None of these

Answer: B

4.Which one of the following applications would be the most appropriate use for an AP model that has internal antennas?

- A. A location where a relatively wide coverage area is desired
- B. A location where coverage is needed toward one side of the AP
- C. A location where a patch antenna's pattern is required
- D. A location where an omnidirectional antenna is not desirable

Answer: A

5.What is the maximum number of subordinate access points (APs) of the same model that can download the image from the primary AP?

- A. Two
- B. Three
- C. Four
- D. Five

Answer: B